





Use the array provided to solve each problem.


1) $35 \times 43 =$




2) $42 \times 32 =$



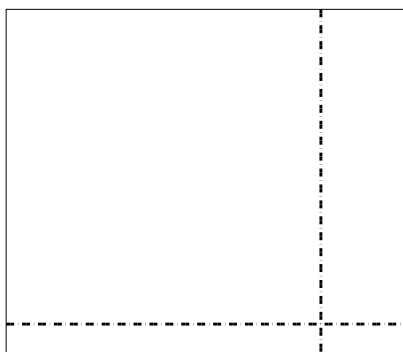
3) $47 \times 55 =$




4) $48 \times 28 =$



5) $33 \times 38 =$



6) $34 \times 46 =$



Answers

1. _____

2. _____

3. _____

4. _____

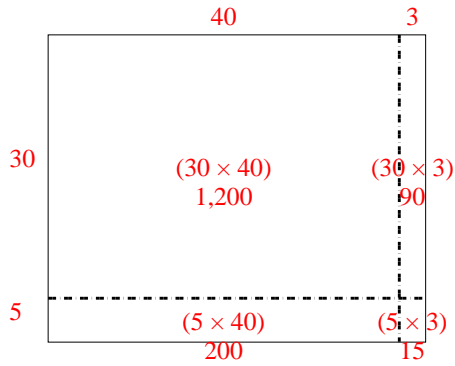
5. _____

6. _____

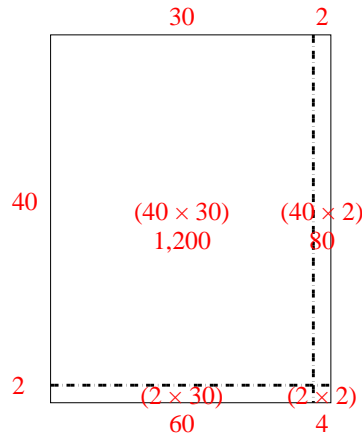


Use the array provided to solve each problem.

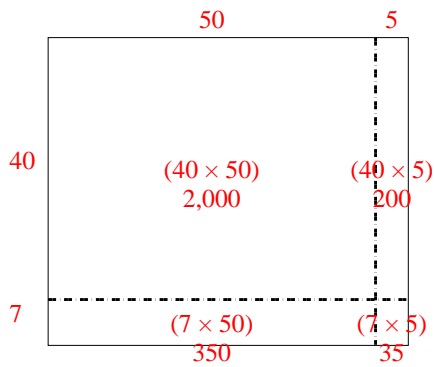
1) $35 \times 43 =$



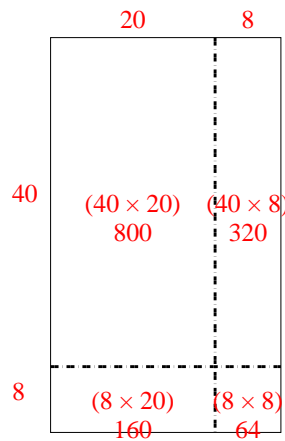
2) $42 \times 32 =$



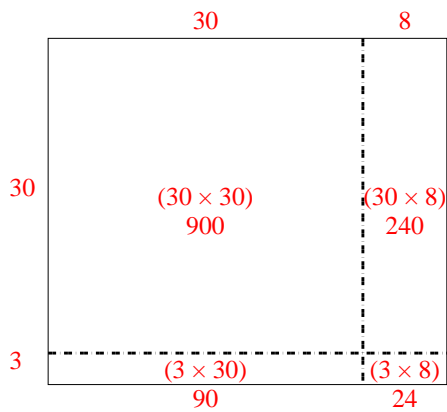
3) $47 \times 55 =$



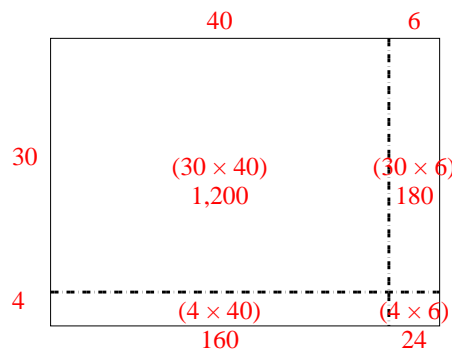
4) $48 \times 28 =$



5) $33 \times 38 =$



6) $34 \times 46 =$



Answers

1. 1,505

2. 1,344

3. 2,585

4. 1,344

5. 1,254

6. 1,564